

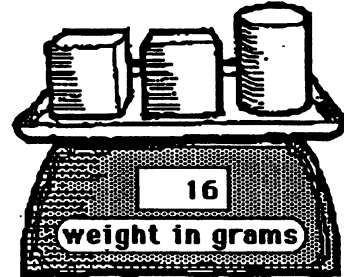
SUNSHINE MATH - 2
Earth, XIV

Name: _____

(This shows my own thinking.)

- ★★ 1. A block weighs 4 grams.
How much does a can weigh?

Answer: _____ grams



- ★★★ 2. Write the correct number in the .

a. + 6 = 11 b. 28 - = 10 c. - 5 = 44

- ★ 3. This piece of paper is $8\frac{1}{2}$ inches wide. Use this information to estimate the length of the pencil below. Circle the best estimate.



Best estimate: 6 inches or 10 inches or 4 inches

- ★★ 4. Every letter of the alphabet has a money value:

A=\$1	E=\$1	I=\$1	M=\$1	Q=\$1	U=\$1	Y=\$1
B=\$2	F=\$2	J=\$2	N=\$2	R=\$2	V=\$2	Z=\$2
C=\$1	G=\$1	K=\$1	O=\$1	S=\$1	W=\$1	
D=\$2	H=\$2	L=\$2	P=\$2	T=\$2	X=\$2	

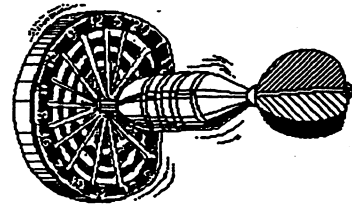
What is the money value of: "I love Math?" \$ _____

- ★ 5. The movie begins at 2:30 p.m. It runs for $2\frac{1}{2}$ hours. What time will the movie be over?

Answer: _____ p.m.

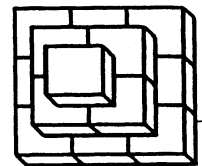
- ★★★ 6. Five students played darts. The chart shows the points for the first turn.

Score on	Turn 1
<i>Name</i>	<i>Points</i>
Lisa	2
John	7
Fran	10
Micky	5
Suki	7



- a. John outscored Lisa by how many points? _____
- b. The team of Lisa, Fran, and Suki outscored the team of John and Micky by how many points? _____
- c. Suki had a total of 12 points after her second turn. How many points did she score on her second turn? _____

- ★★★ 7. Use cubes to make this figure. Write how many cubes there are.



Answer: _____ cubes

- ★★ 8. Find the answer to this problem by using a calculator. $11004 - 3269$

Turn the calculator upside down.

What word does it spell? _____